

## Classifying Angles

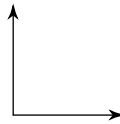
Date \_\_\_\_\_ Period \_\_\_\_\_

**Classify each angle as acute, obtuse, right, or straight.**

1)



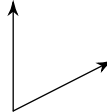
2)



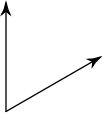
3)



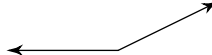
4)



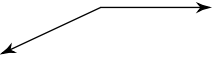
5)



6)



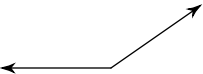
7)



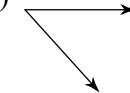
8)



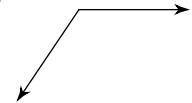
9)



10)



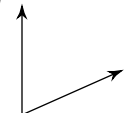
11)



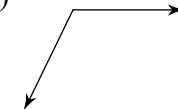
12)



13)



14)

15)  $16^\circ$ 17)  $90^\circ$ 19)  $59^\circ$ 21)  $119^\circ$ 23)  $162^\circ$ 25)  $15^\circ$ 27)  $96^\circ$ 16)  $180^\circ$ 18)  $97^\circ$ 20)  $39^\circ$ 22)  $82^\circ$ 24)  $52^\circ$ 26)  $116^\circ$ 28)  $74^\circ$

## Classifying Angles

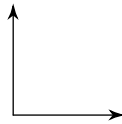
Date \_\_\_\_\_ Period \_\_\_\_\_

Classify each angle as acute, obtuse, right, or straight.

1) obtuse



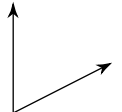
2) right



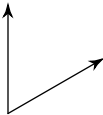
3) obtuse



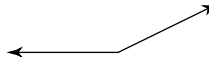
4) acute



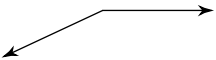
5) acute



6) obtuse



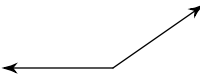
7) obtuse



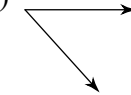
8) straight



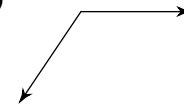
9) obtuse



10) acute



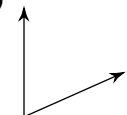
11) obtuse



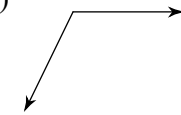
12) obtuse



13) acute



14) obtuse

15)  $16^\circ$  acute17)  $90^\circ$  right19)  $59^\circ$  acute21)  $119^\circ$  obtuse23)  $162^\circ$  obtuse25)  $15^\circ$  acute27)  $96^\circ$  obtuse16)  $180^\circ$  straight18)  $97^\circ$  obtuse20)  $39^\circ$  acute22)  $82^\circ$  acute24)  $52^\circ$  acute26)  $116^\circ$  obtuse28)  $74^\circ$  acute